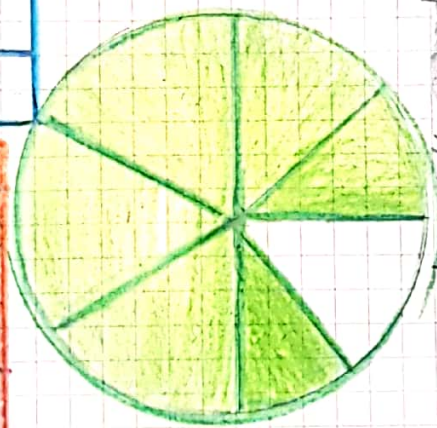


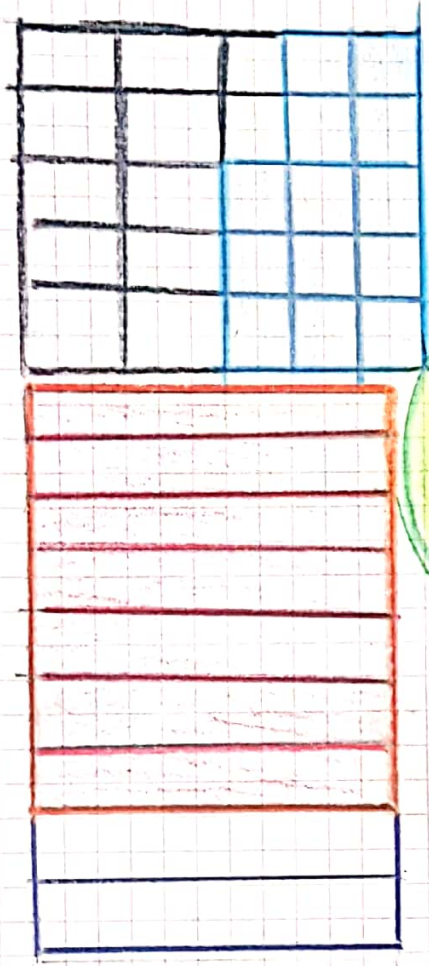
Quiry

6th October 2021

1. Examples of fractions corresponding



$$\frac{5}{6}$$



$$\frac{13}{25}$$

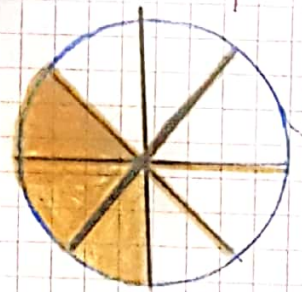
$$\frac{7}{9}$$

6th October 2021

2. Representa grafica mente y simbolicamente la siguiente fraccion


$$\frac{3}{7}$$

Tres Sietes




$$\frac{5}{72}$$

Cinco docenas



$$\frac{4}{8}$$

Cuatro octavas



Cuatro novenas

$$\frac{4}{9}$$

