

homework

Relacionar una Fracción representarla y escribir si es propia o impropia.

$$\frac{8}{5}$$

impropia.



$$\frac{9}{10}$$




12-09-2021.

Taller.

Convertir las siguientes fracciones impropias a números

11




$$\begin{array}{r} 6 \\ \hline 7 \end{array}$$

pepita




$$\begin{array}{r} 10 \\ \hline 8 \end{array}$$

Imp repia




$$\begin{array}{r} 75 \\ \hline 75 \end{array}$$

unidad



?



$$\frac{4}{9}$$

propia



$$\frac{5}{5}$$

unidad



$$\frac{12}{2}$$

impropia

