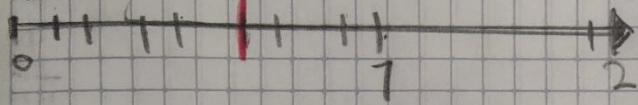



# Tarea

Ubicar en la recta numerica las siguientes fracciones:


$\frac{5}{8}$  cinco octavos




$\frac{4}{11}$  cuatro onceavos



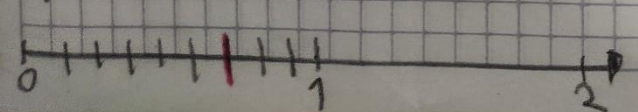
$\frac{1}{2}$  un medio



$\frac{7}{10}$  siete decimos



$\frac{6}{9}$  seis novenas.



$\frac{3}{4}$  tres cuartos.

