







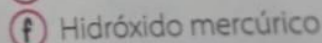
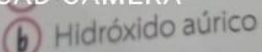
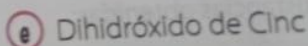
130

En tu cuaderno

2 Nombra las siguientes sustancias con las tres nomenclaturas.



3 Escribir la fórmula de las sustancias con sus estados de oxidación.



REDMI NOTE 9
AI QUAD CAMERA

Acidos

Los acidos que caracterizan la biología. Los reacciones m...