

Actividad

Representar graficamente en recta numerica y escribir la clase de cada una de las fracciones y como se leen.

$$* \frac{70}{5} \quad * \frac{18}{3}$$

$$* \frac{11}{15} \quad * \frac{10}{12}$$


$$* \frac{3}{9} \quad * \frac{18}{7}$$

$$* \frac{13}{6} \quad * \frac{9}{9}$$

Solución


7. $\frac{10}{5}$ fracción impropia

Diez quintos



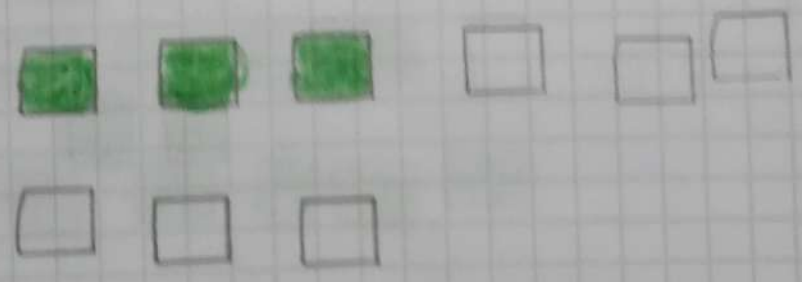
2. $\frac{11}{13}$ propia

once treceavos




3. $\frac{3}{9}$ propia

tres novenas




4. $\frac{13}{6}$ impropia

trece sextos



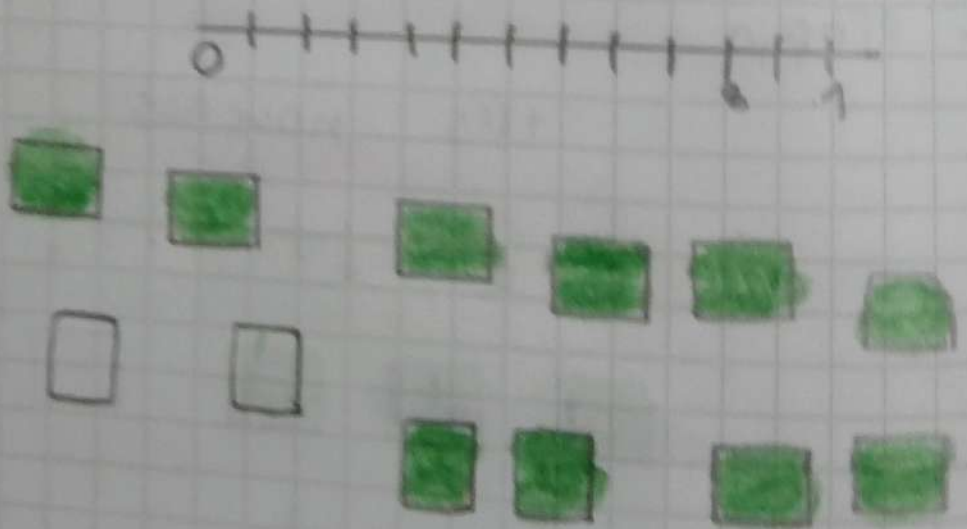
5 $\frac{18}{3}$ impropia

dieciocho tercios



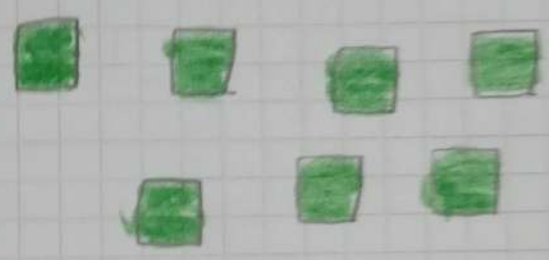

6 $\frac{70}{12}$ propia

diez docenas



7 $\frac{18}{7}$ impropia

dieciocho septimos



8 $\frac{9}{9}$ propia

nueve novenos

