
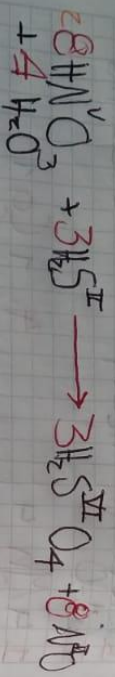



Responde Analizar y comparar el metodo de Balon
 con por oxidacion-reduccion o redox




3 Sn Oxida
 4 N Reduce



3 S Oxida
 8 N Reduce




3 Sn Oxido
 4 N Reduce



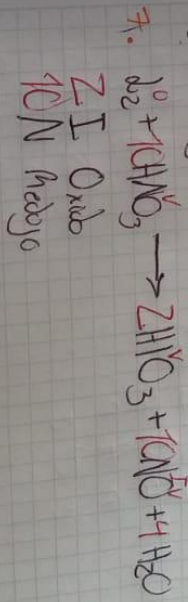
Cl Reduce
 3 Sn Oxido



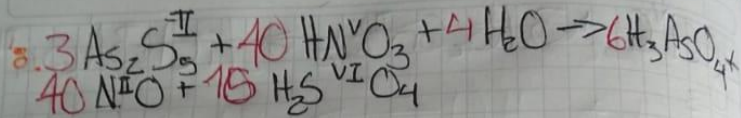
5 S Oxido
 2 I Reduce



3 As Oxido
 5 N Reduce

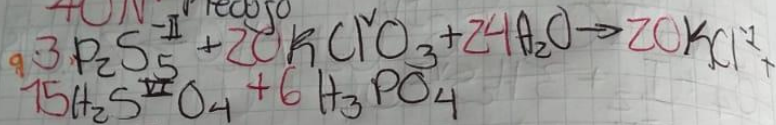


2 As Oxido
 10 N Reduce



15 S^{-II} Oxido

40 N^V Redoxo



15 S^{-II} Oxido

20 Cl^V Redoxo