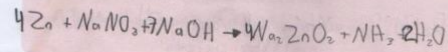
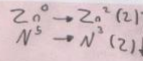

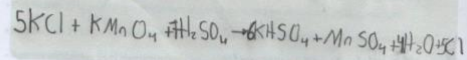
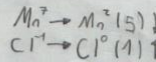
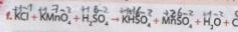

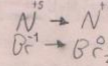

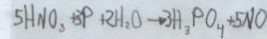
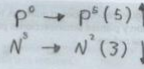
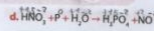
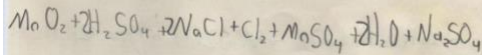
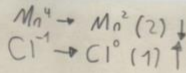
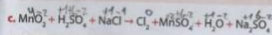
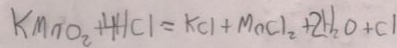
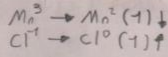
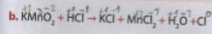
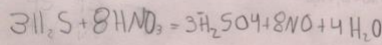
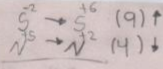
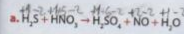
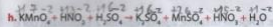


1. Balancea por óxido-reducción las siguientes ecuaciones químicas, teniendo en cuenta los números de oxidación y plantea semirreacciones para cada una, indica quien se oxida y quien se reduce.



Química



Este ejercicio no se puede realizar. \Rightarrow

