




$$\frac{9}{4}$$



## Actividad

Escribe el tipo de fracción y representarlo gráficamente

$$\frac{13}{2}$$



$$\frac{9}{12}$$

$$\frac{5}{5}$$

$$\frac{12}{5}$$

$$\frac{11}{10}$$

$$\frac{8}{15}$$


$$\frac{9}{9}$$

SOLUCION


$\frac{7}{12}$  nueve doceavos




$\frac{2}{9}$  nueve novenos




$\frac{5}{5}$  cinco quintos



$\frac{12}{5}$  doce quintos



$\frac{11}{10}$  once diecimos



$\frac{8}{15}$  ocho quinceavos

