



~~$\frac{10}{15}$~~

~~$\frac{9}{9}$~~

1 Fracciones propias



2 Fracciones unidad



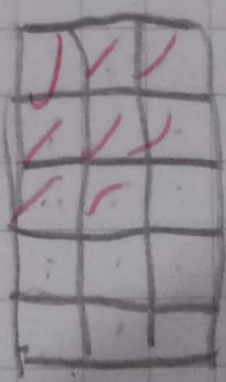
3 Fracciones impropias



4 Fracciones impropias



5 Fracciones propias



6 Fracciones unidad

