

QUIZ


Escribir como se leen,
representar gráficamente,
representar en la recta
numérica y escribir la clase
de las siguientes fracciones:

* $\frac{9}{4}$

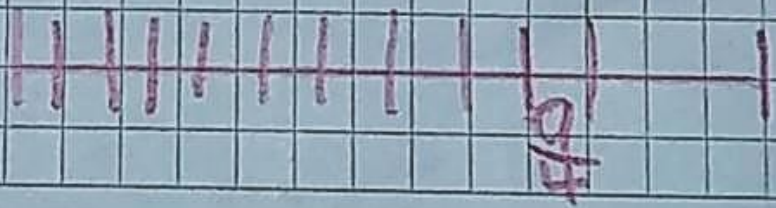
* $\frac{5}{7}$

* $\frac{6}{6}$


7. $\frac{9}{7}$




• Nueve cuartos



2. $\frac{5}{7}$



● Cinco septimos.



3. $\frac{5}{6}$



● Seis sextos.

