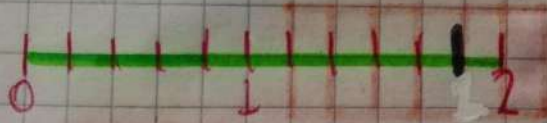



Resolución

# Fraciones Aparente e impropias



$$\frac{11}{15}$$




# Fraciones Propias



$$3 - \frac{3}{9}$$




Fracciones propias



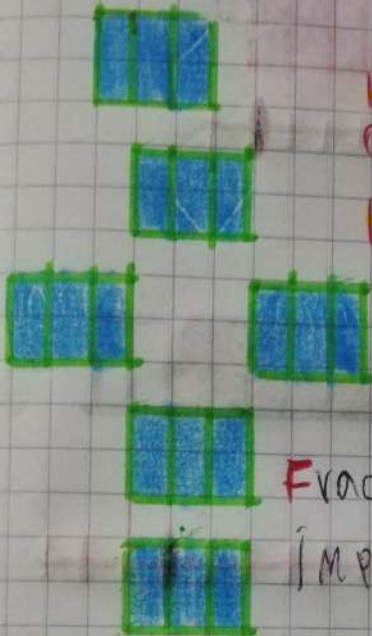
$$4 - \frac{13}{6}$$



Fracciones  
impropias



$$5 - \frac{18}{3}$$





Fracciones Aparentes e  
Ímpropias

$$6 - \frac{18}{7}$$




Fracciones Impropias



$$7 - \frac{9}{9}$$

fracciones unidad



$$8 - \frac{10}{12}$$



fracciones propias