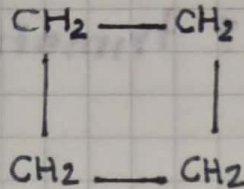


EJERCICIOS

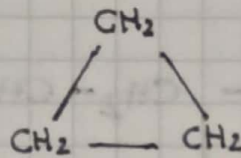
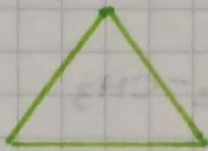
Nombre los siguientes ciclos.

1.



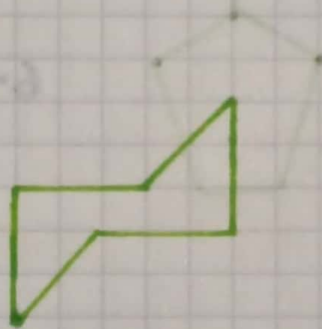
ciclobutano

2.




ciclopropano

3.



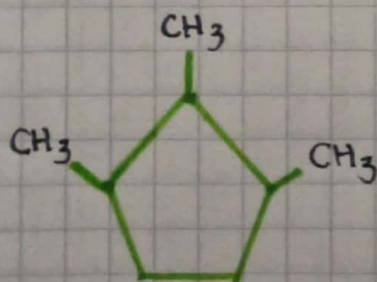
ciclohexano

4.



ciclopentano

5.



1,2,3 trimetil ciclo
pentano

