

Tradicional

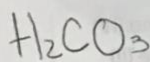
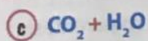
Acido nitroso

Sistema

dióxido de hidrogeno

Stock

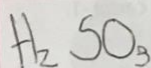
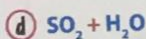
Acido nitroso (III)



Acido Carbonico

trioxocarbato de hidrogeno


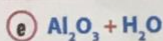
Acido trioxocarbico (IV)



Acido sulfuroso

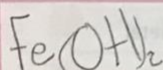
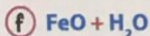
triosulfato de hidrogeno

Acido triosulfuroso (IV)



Hidroxido de Aluminio \leftrightarrow Oxido de Aluminio


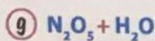
Oxido de Aluminio (III)



hidroxido Ferroso

hidroxido de hierro

hidroxido de hierro (II)



Trad
Acido Nitrico

Sistema
trioxonitrato de hidrogeno

Stock
Acido trioxonitrico (V)

En tu cuaderno

2 Nombra las siguientes sustancias con las tres nomenclaturas.

